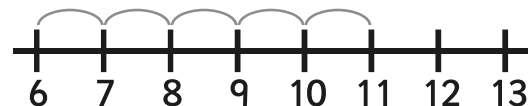


# Addition and Subtraction to 20 with a Number Line

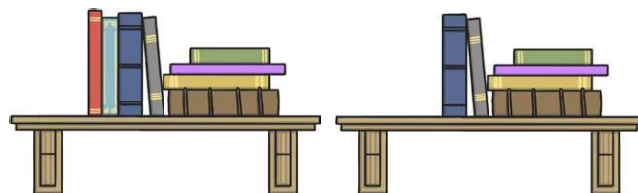
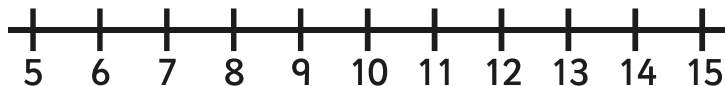
Example:

$$11 - 5 = 6$$



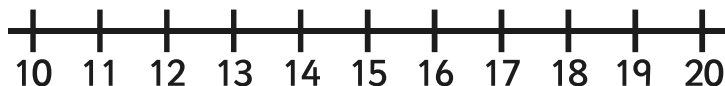
Can you work out the answer and draw a picture or write a sentence about it?  
The first one is done for you.

$$8 + 6 =$$



*I have a bookshelf with 8 books on and another with 6 on. How many books do I have altogether?*

$$14 - 3 =$$



$$5 + 6 =$$



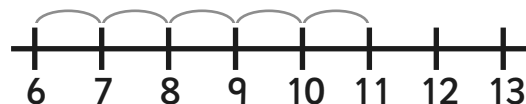
$$10 - 7 =$$



# Addition and Subtraction to 20 with a Number Line


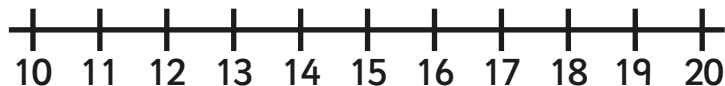
Example:

$$11 - 5 = 6$$



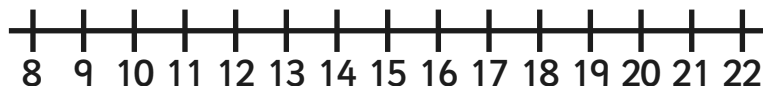
Can you work out the answer and draw a picture or write a sentence about it?  
The first one is done for you.

$$18 - 6 =$$

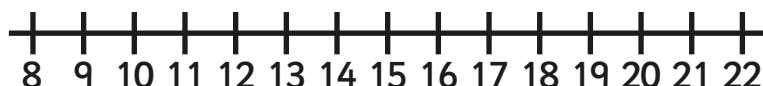


*My Dad buys 18 eggs but breaks 6 of them. How many eggs does he have left?*

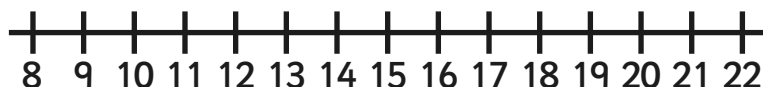
$$8 + 12 =$$



$$11 + 9 =$$



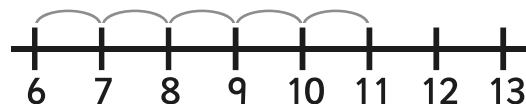
$$17 - 8 =$$



# Addition and Subtraction to 20 with a Number Line

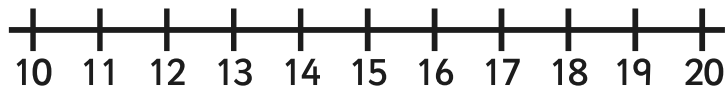
Example:

$$11 - 5 = 6$$



Can you work out the answer and draw a picture or write a sentence about it?  
The first one is done for you.

$$19 - 7 =$$



*I had 19 teddies but I took 7 to the summer fair at school. How many do I have now?*

$$18 - 12 =$$



$$5 + 13 =$$



$$12 + 7 =$$

