


Thursday 1st July Maths

For each pair of shapes, **what is the same and what is different?**

Pair of shapes:



Pair of shapes:



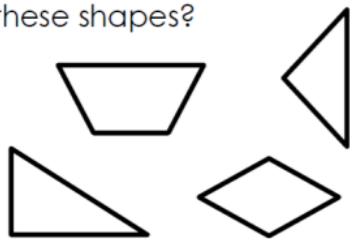
Think of a reason why **each shape** could be the **odd one out**:



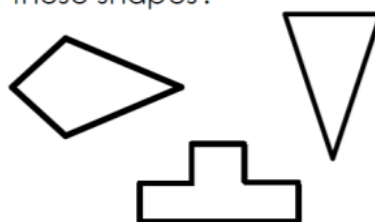
Extension: design an odd one out question using 3 shapes where **each shape could be the odd one out**.

E
X
P
L
A
I
N

What is **the same** about these shapes?



What is **the same** about these shapes?

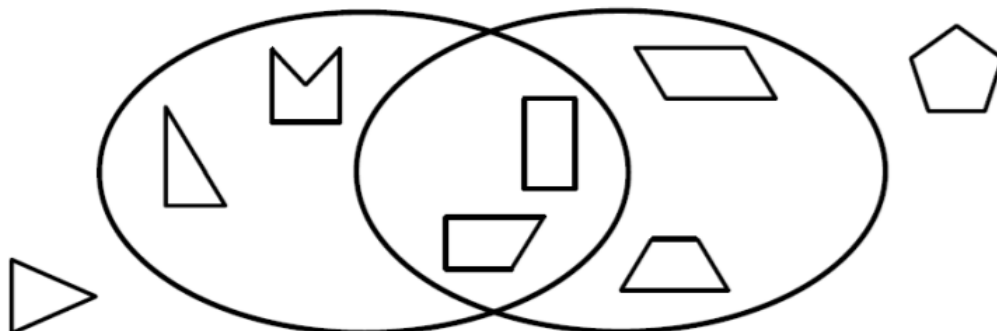


E
X
T
E
N
D

The headings for each section of the Venn diagram have been hidden. **What could each heading be?**

Heading A

Heading B



Draw other shapes in each section of the Venn diagram.