

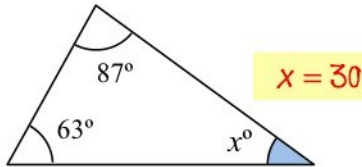


ANGLES

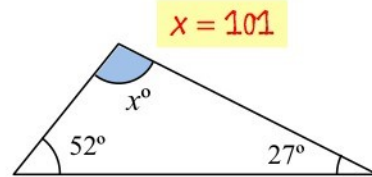
ANGLES IN TRIANGLES

Ref: G423. **3F1**

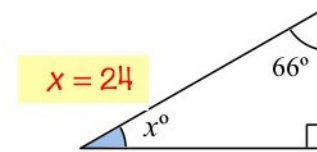
A1 Work out the value of x .



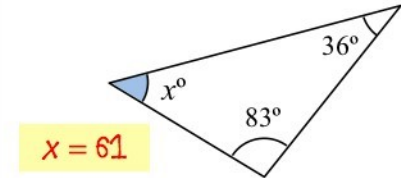
A2 Work out the value of x .



A3 Work out the value of x .



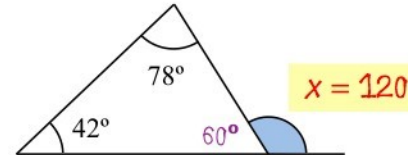
A4 Work out the value of x .



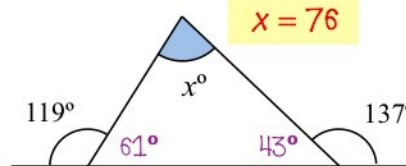
B1 Work out the value of x .



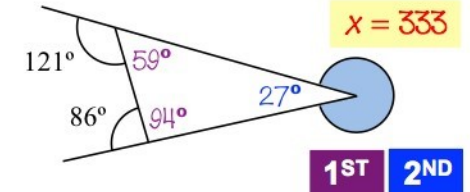
B2 Work out the value of x .



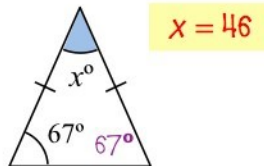
B3 Work out the value of x .



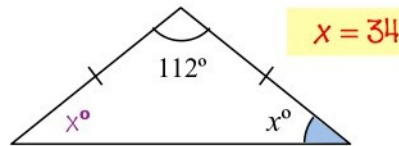
B4 Work out the value of x .



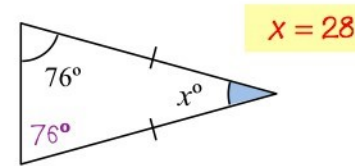
C1 Work out the value of x .



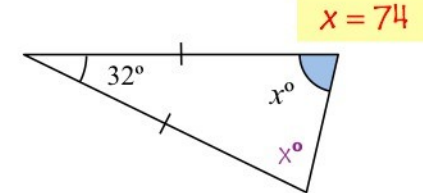
C2 Work out the value of x .



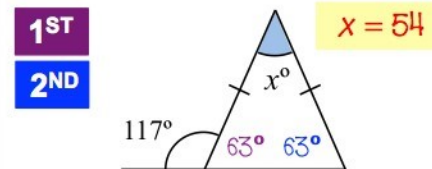
C3 Work out the value of x .



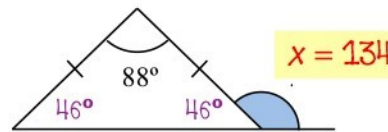
C4 Work out the value of x .



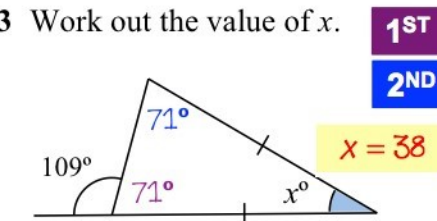
D1 Work out the value of x .



D2 Work out the value of x .



D3 Work out the value of x .



D4 Work out the value of x .

