



1 A plus 10 = 30



1 mark

2 39 - A = 31



1 mark

3 7 multiplied by A = 49



1 mark



Total for this page

4 700 divided by A = 7



1 mark

5 One half of A is 56



1 mark

6 Double A is 940



1 mark



Total for this page

7

If $A = 5$ and $B = 11$ what is AB ?



1 mark

8

If $A = 17$ and $B = 6$ what is $A - B$?



1 mark

9

If $A = 389$ and $B = 9047$ what is $A + B$?



1 mark

10

If $A = 716$ what is $\frac{1}{4}$ of A ?



1 mark

11

If $A = 8$ what is the square of A ?



1 mark

12

If $A = 890$ what is 10% of A ?



1 mark

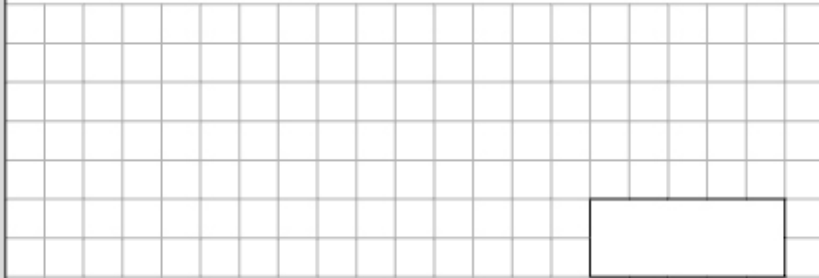


Total for this page



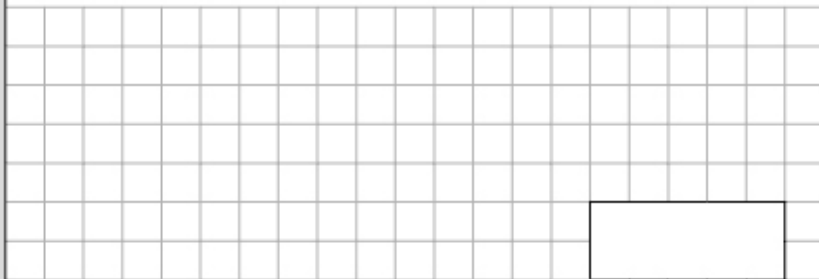
Total for this page

13 If A is 45 what is $\frac{2}{5}$ of A?




1 mark

14 If A = 32 what is $\frac{1}{100}$ of A?



1 mark


15 If A = 4.52 what is double A ?



1 mark


Total for this page

16 If A = 3400 what is 75% of A?




1 mark

17 If A = 3 what is $(A + A + A) - 2$



1 mark

18 A is the square root of 144. What is A?



1 mark

Total for this page

19 If $A = 768$ What is 0.1 of A ?

1 mark

20 25% of A is 345 . What is A ?

1 mark

21 If $A = \frac{3}{4}$ what is AA ?

1 mark

22 If $A = \frac{3}{4}$ what is A divided by A ?

1 mark

23 If $A = \frac{2}{3}$ divide A by 0.3

1 mark

24 If A is 26 what is AAA ?

1 mark

Total for this page

Total for this page